

Modified Enlarged 24pt
OXFORD CAMBRIDGE AND RSA EXAMINATIONS

Thursday 4 June 2020 – Morning

GCSE (9–1) Mathematics

J560/05 Paper 5 (Higher Tier)

**Time allowed: 1 hour 30 minutes
plus your additional time allowance**

YOU CAN USE:

**geometrical instruments
tracing paper**

DO NOT USE:

a calculator

Please write clearly in black ink.

Centre number

--	--	--	--	--

Candidate number

--	--	--	--

First name(s) _____

Last name _____

READ INSTRUCTIONS OVERLEAF



INSTRUCTIONS

Use black ink. You can use an HB pencil, but only for graphs and diagrams.

Write your answer to each question in the space provided. If you need extra space use the lined pages at the end of this booklet. The question numbers must be clearly shown.

Answer ALL the questions.

Where appropriate, your answer should be supported with working. Marks might be given for using a correct method, even if your answer is wrong.

INFORMATION

The total mark for this paper is 100.

The marks for each question are shown in brackets [].

ADVICE

Read each question carefully before you start your answer.

Answer ALL the questions.

- 1 Write 75 as a product of its prime factors.**

[2]

2 (a) Solve.

$$4x + 3 = 13$$

(a) $x =$ _____ [2]

(b) Multiply out and simplify.

$$5(2x + 3) + 2(x - 4)$$

(b) _____ [3]

- 3 (a) The ratio 45 minutes to 3 hours
45 minutes can be written in the
form $1 : n$.**

Find the value of n .

(a) $n =$ _____ [2]

(b) Reece and Sarah share some money in the ratio 9 : 16.

Reece says that Sarah gets more than 60% of this money.

Show that Reece is correct.

[3]

4 Dora has the following number cards.



She takes a card at random, replaces the card and then takes a second card. She adds the numbers on the two cards she has taken and records the total.

(a) Complete the following table to show all of her possible totals. [1]

		First card				
Second card	Total	2	2	3	5	6
	2	4	4	5	7	8
	2	4	4	5		8
	3	5	5		8	9
	5	7		8	10	11
	6	8	8	9	11	12

(b) Find the probability that her total is

(i) an even number,

(b)(i) _____ [2]

(ii) a multiple of 3 or 4.

(ii) _____ [2]

5 Charlie and Jasmine share cartons of apple juice.

Charlie drinks $\frac{1}{3}$ of a carton every day.

Jasmine drinks $\frac{2}{5}$ of a carton every day.

Any apple juice left in a carton at the end of the day is used the following day.

**The cost of a carton is 70p.
Charlie and Jasmine buy just enough cartons to last them for 10 days.**

**How much do they spend in total for these cartons?
Give your answer in £.**

Show your working.

£ _____ [6]
11

- 6 A clock chimes every 20 minutes.
A light flashes every 8 minutes.
The clock chimes and the light flashes
together at 08:00.**

**How many times between 08:01 and
12:30 will the clock chime and the light
flash together?**

Show your working.

[5]

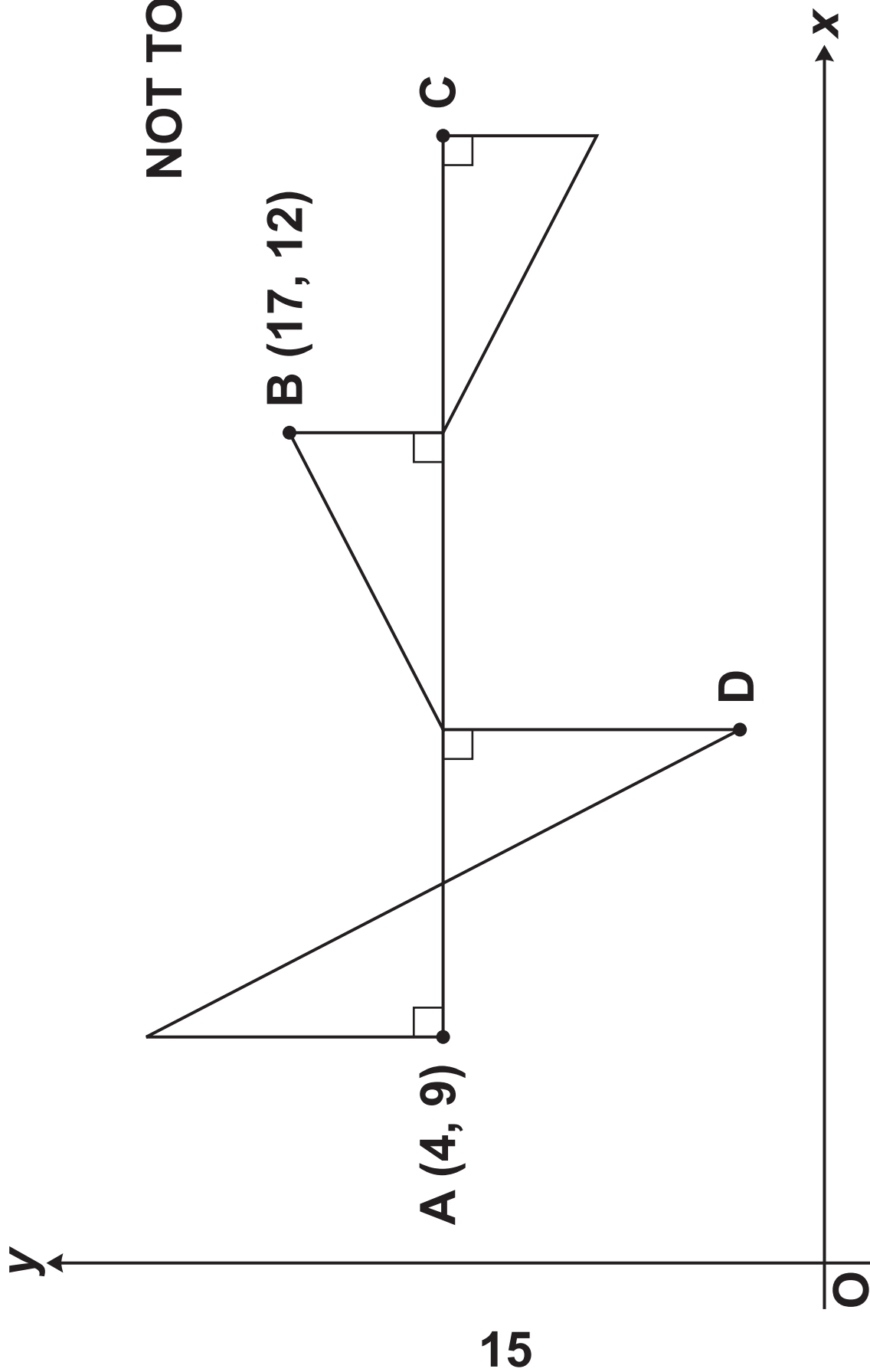
- 7 A pattern shown opposite is made from four congruent right-angled triangles.**

**The line AC is parallel to the x-axis.
The point A has coordinates (4, 9) and
the point B has coordinates (17, 12).**

**Work out the coordinates of point C
and point D.**

C (_____ , _____)

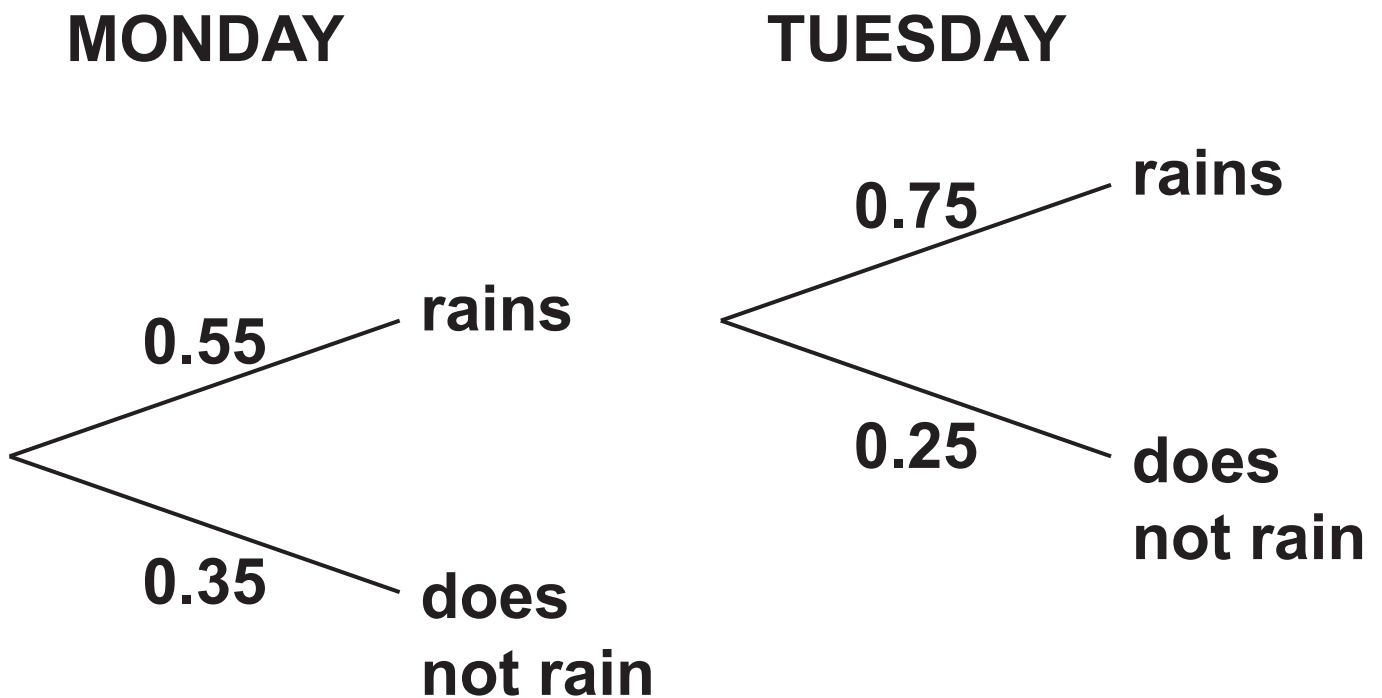
D (_____ , _____) [5]



8 A weather forecast says

- the probability that it will rain on Monday is 0.55
- and
- the probability that it will rain on Tuesday is 0.25.

Ella draws a tree diagram to show this information.



Write down three errors that Ella has made with her tree diagram.

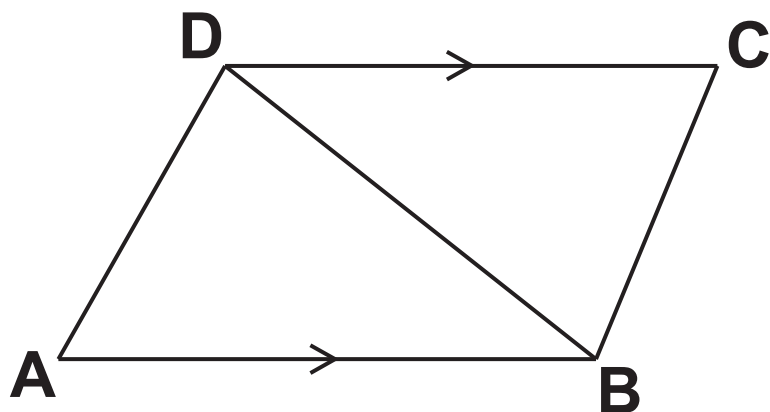
1 _____

2 _____

3 _____

_____ **[3]**

- 9 In the diagram, AB and DC are parallel lines of equal length.



NOT TO SCALE

Prove that angle DAB = angle BCD.

[4]

10 Each day, Eve records how long it takes her to complete a puzzle.

On Friday, she took 50% less time than on Thursday.

On Saturday, she took 20% less time than on Friday.

On Saturday, she takes 36 minutes to complete the puzzle.

How many minutes did she take to complete the puzzle on Thursday?

Show your working.

_____ minutes [5]

11 (a) Work out.

$$16^{-\frac{1}{2}}$$

(a) _____ **[2]**

(b) Simplify.

$$\sqrt{6} \times \sqrt{3}$$

(b) _____ **[2]**

BLANK PAGE

12 The price, $\pounds P$, of a car is $\pounds 20\,000$ in 2019. The price is expected to decrease by 5% each year after 2019.

(a) Jasmine says

This means the price in 2021 is expected to be $\pounds 18\,000$.

She is incorrect.

Explain her error and work out the correct answer.

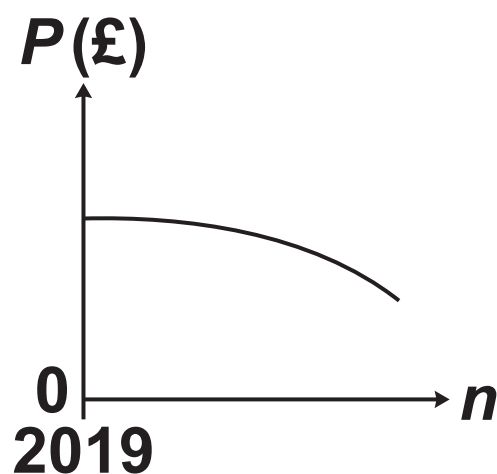
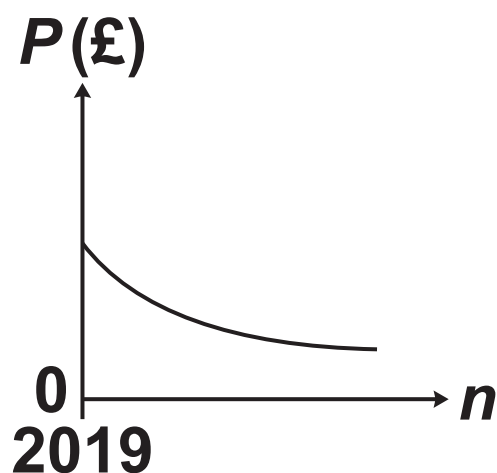
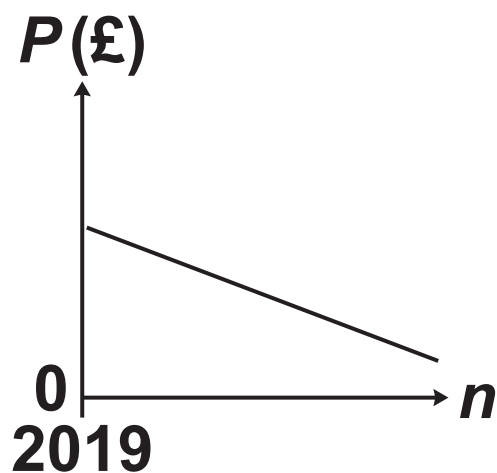
Her error is _____

The correct answer is £_____ [4]

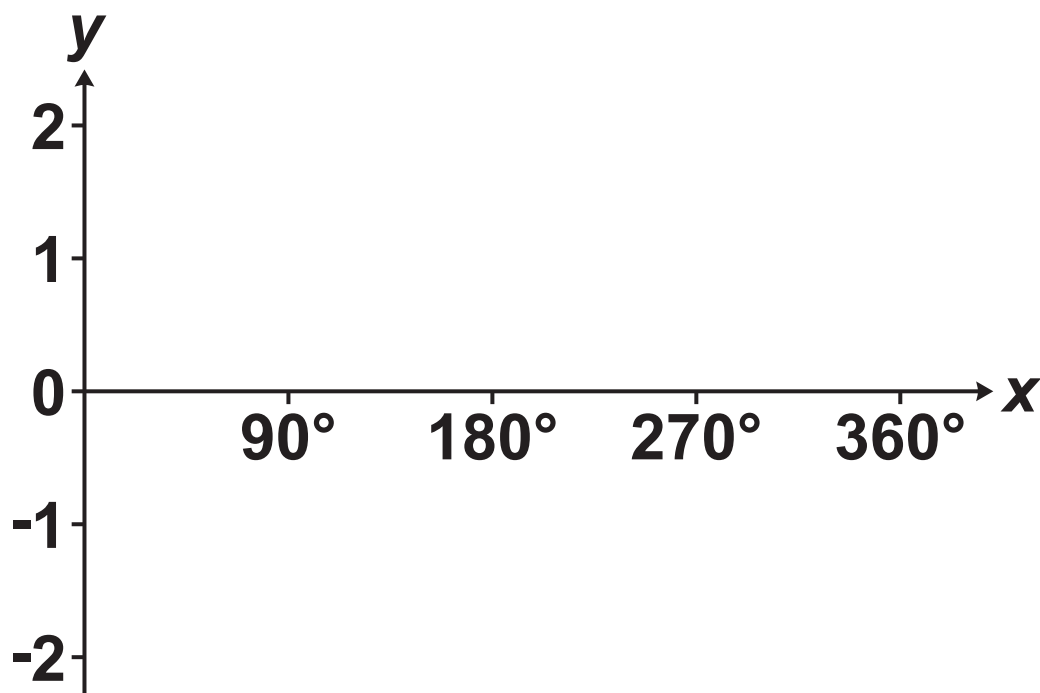
- (b) (i) Write a formula for P in terms of n , where n is the number of years after 2019.**

(b)(i) $P =$ _____ [2]

- (ii) Circle the graph that best represents the price, $\pounds P$, of the car n years after 2019. [1]



13 (a) Sketch the graph of $y = \sin x$ for $0^\circ \leq x \leq 360^\circ$. [2]



(b) The graph of $y = \cos(x - 30)$ for $0^\circ \leq x \leq 360^\circ$ crosses the x -axis in two places.

Write down the values of x where this occurs.

$x =$ _____ and _____ [2]

14 Simplify.

(a) $4a^{\frac{1}{2}} \times 3a^2$

(a) _____ [2]

(b) $\left(\frac{2a^2}{a^{-3}}\right)^3$

(b) _____ [3]

15 Solve.

$$\frac{x}{x+6} = 5$$

$$x = \underline{\hspace{10em}} \quad [3]$$

16 (a) The masses, m kg, of some parcels are shown below.

4

15

14

11

12

3

1

18

13

2

16

10

Jack constructs this grouped frequency table to record the masses.

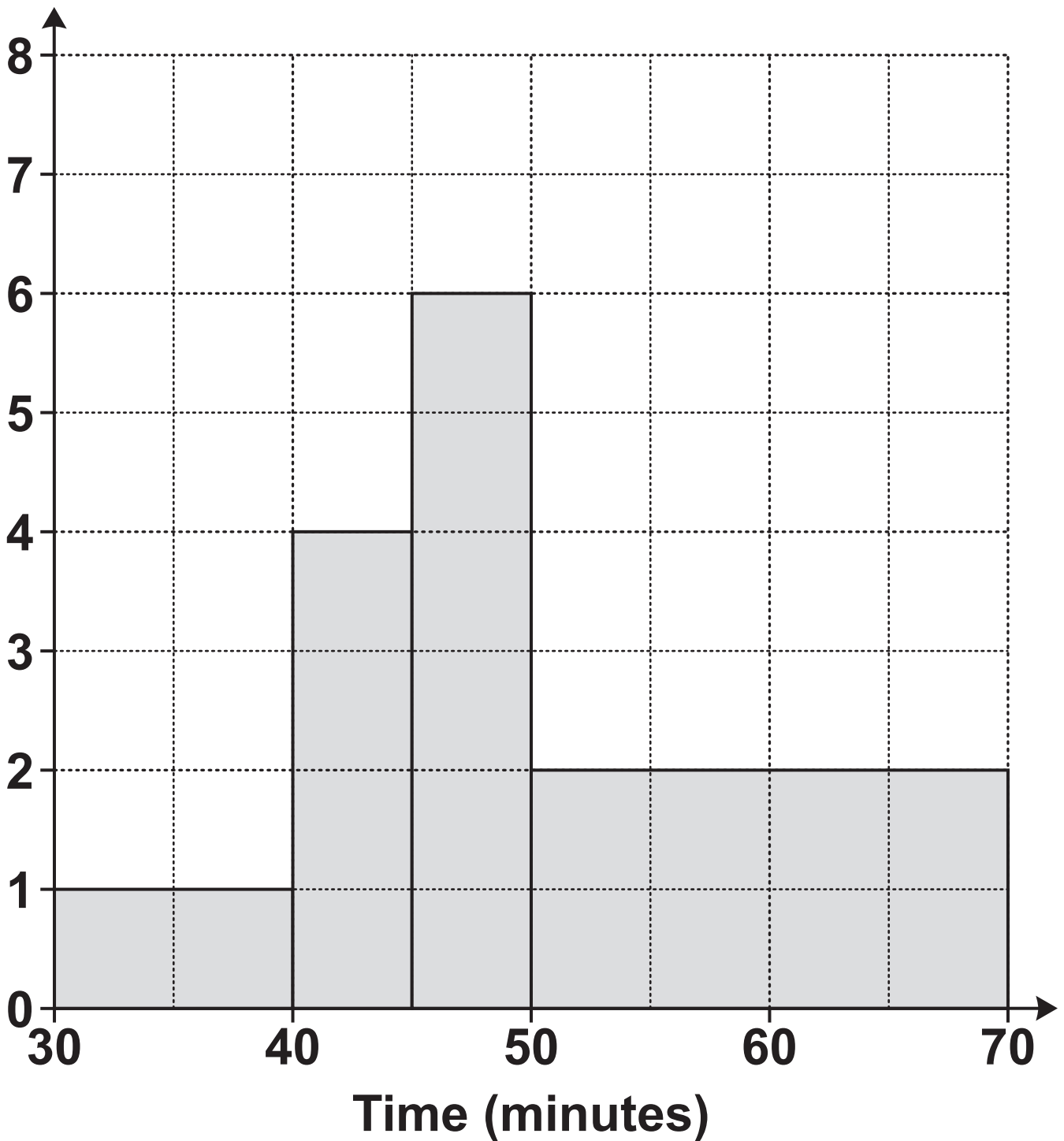
MASS (m kg)	TALLY	FREQUENCY
$0 \leq m \leq 5$		
$5 \leq m \leq 10$		
$10 \leq m \leq 15$		
$15 \leq m \leq 20$		

Explain why Jack’s table is unsuitable to record the masses.

_____ [1]

(b) The histogram summarises the times taken, in minutes, by some students to complete a race.

**Frequency
density**

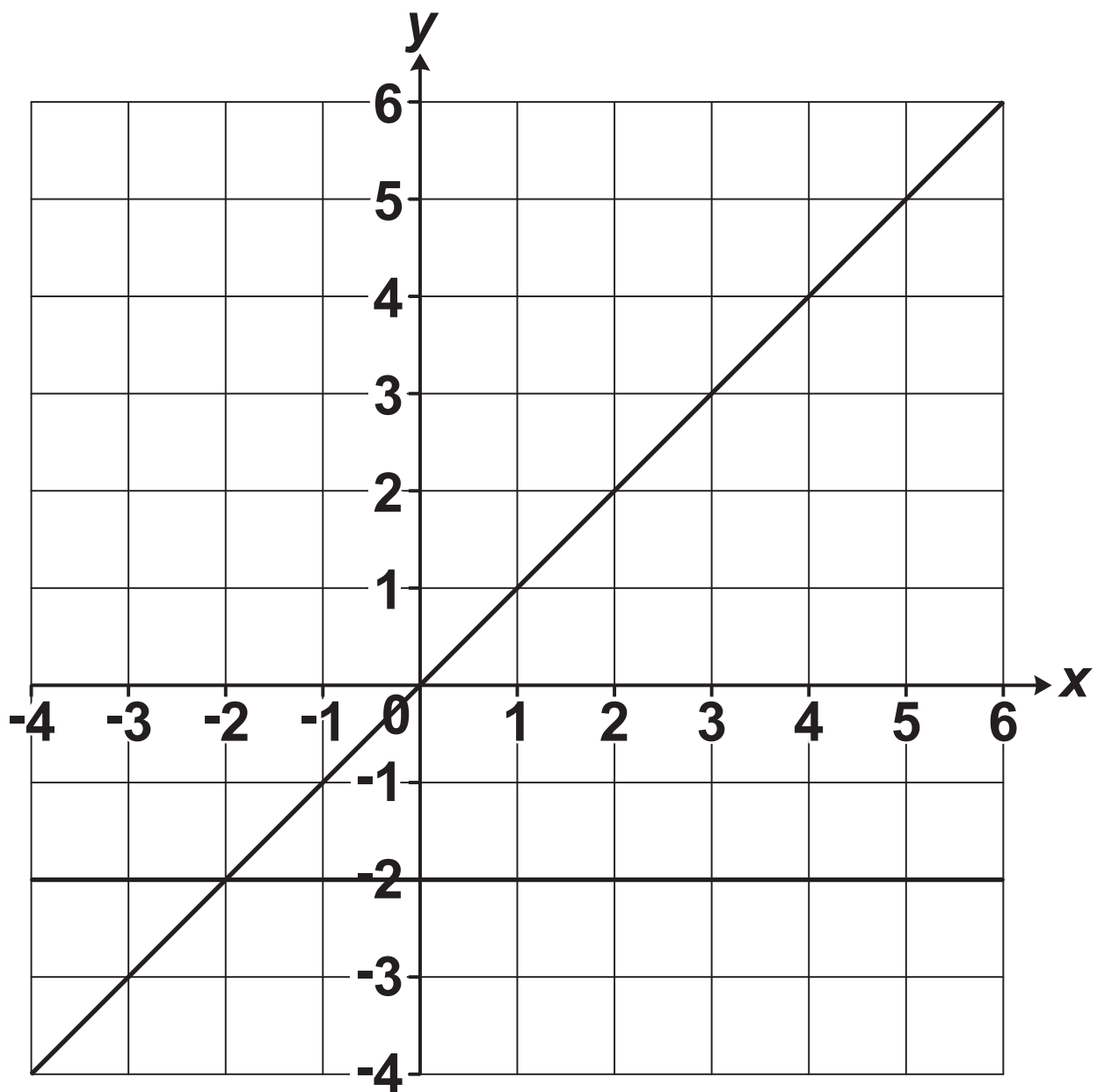


(i) Show that 70 students took between 45 and 70 minutes to complete the race. [2]

(ii) Calculate an estimate of the mean time taken to complete the race. Show your working.

(b)(ii) _____ min [5]
35

17 The graphs of $y = x$ and $y = -2$ are drawn on the grid.



The region R satisfies the following inequalities.

$$y \geq -2$$

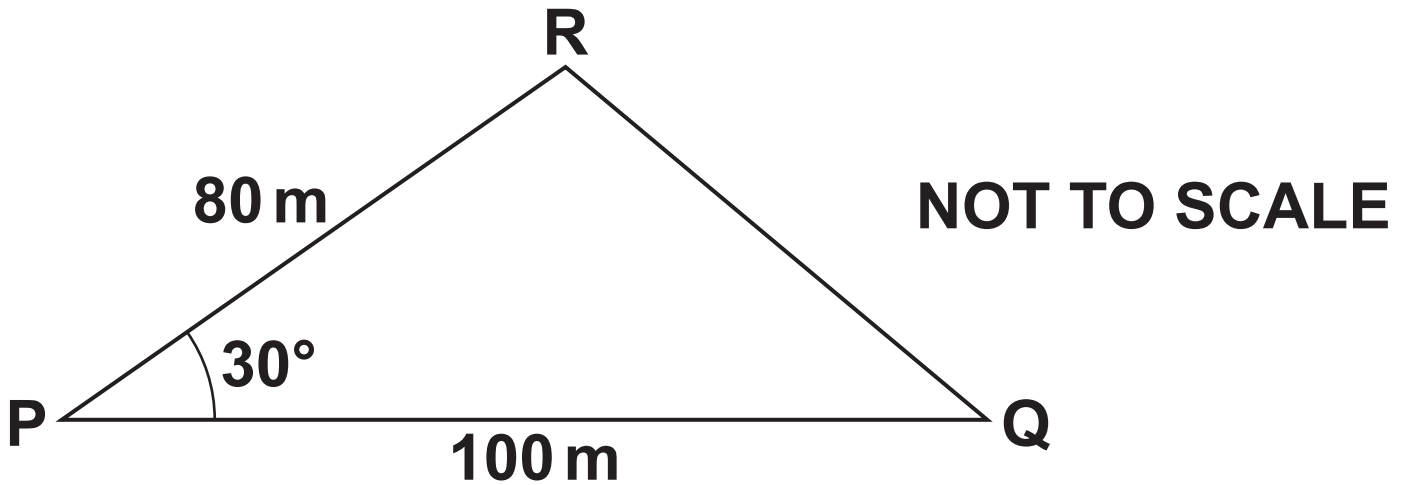
$$y \leq x$$

$$y < 4 - 2x$$

By drawing one more line, find and label the region R. [5]

BLANK PAGE

- 18 The diagram shows a triangular field PQR which is used to grow organic carrots.**



$PQ = 100\text{ m}$, $PR = 80\text{ m}$ and angle $RPQ = 30^\circ$.

In recent years, an average of 2.5 kg of carrots has been harvested from each square metre of the field.

(a) Use this information to work out the total mass of carrots that might have been harvested from the field in 2019.

(a) _____ kg [4]

(b) Why might the answer to part (a) be unreliable?

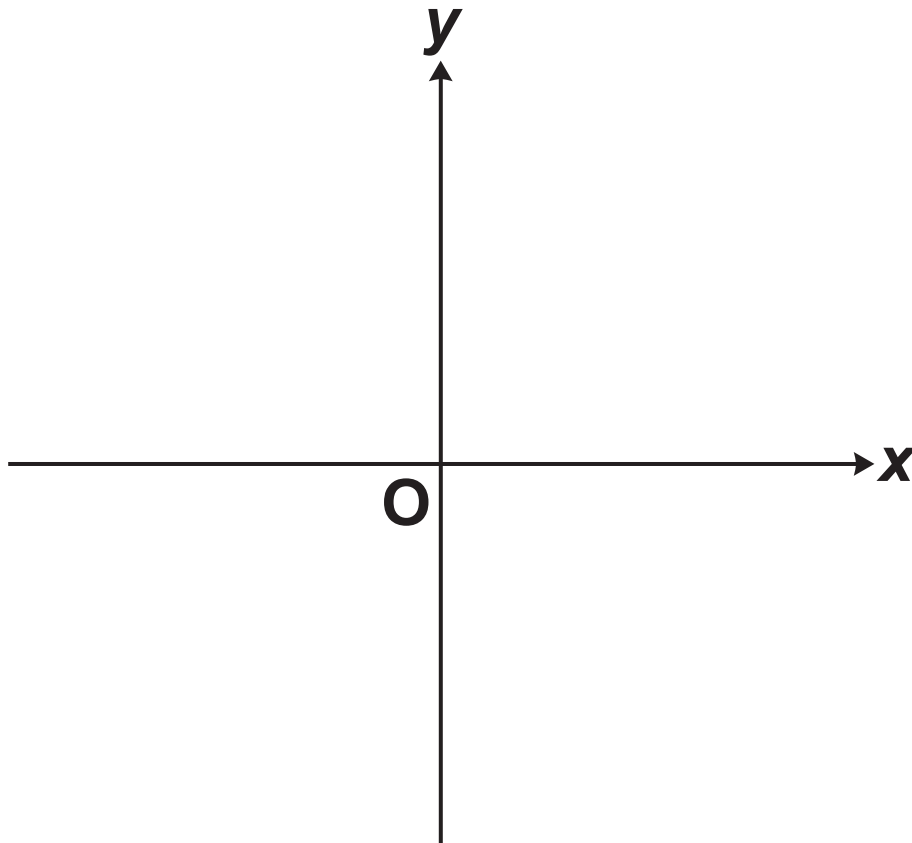
[1]

BLANK PAGE


19 (a) Write $x^2 - 10x + 22$ in the form $(x - a)^2 - b$.

(a) _____ [3]

- (b) Sketch the graph of $y = x^2 - 10x + 22$. Show clearly the coordinates of any turning points and the value of the y -intercept. [4]



20 ABCD is a trapezium.



NOT TO SCALE

**The perimeter of the trapezium is 56 cm.
The ratio $AD : AB : DC : BC = 5 : 12 : 6 : 5$.**

Calculate the area of the trapezium.

Show your working.

_____ **cm² [7]**

END OF QUESTION PAPER

ADDITIONAL ANSWER SPACE

If additional space is required, you should use the following lined page(s). The question number(s) must be clearly shown in the margin(s).

[illegible]



Copyright Information

OCR is committed to seeking permission to reproduce all third-party content that it uses in its assessment materials. OCR has attempted to identify and contact all copyright holders whose work is used in this paper. To avoid the issue of disclosure of answer-related information to candidates, all copyright acknowledgements are reproduced in the OCR Copyright Acknowledgements Booklet. This is produced for each series of examinations and is freely available to download from our public website (www.ocr.org.uk) after the live examination series.

If OCR has unwittingly failed to correctly acknowledge or clear any third-party content in this assessment material, OCR will be happy to correct its mistake at the earliest possible opportunity.

For queries or further information please contact The OCR Copyright Team, The Triangle Building, Shaftesbury Road, Cambridge CB2 8EA.

OCR is part of the Cambridge Assessment Group; Cambridge Assessment is the brand name of University of Cambridge Local Examinations Syndicate (UCLES), which is itself a department of the University of Cambridge.